

Grade R – English
Week 1: My Home

Hello Grade R's this week we are learning about My Home as well as the letter 'h'.

Day 1

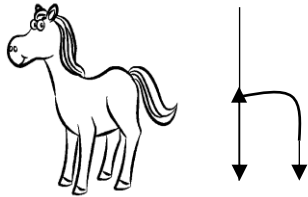
Find a picture from a magazine/ colouring book/ newspaper/ internet of a house. Ask mommy/ daddy to cut the picture into 12 pieces. See if you can build it back together. If you have some glue, stick the puzzle down onto a piece of paper.

Day 2

Let's listen to the sound 'h', look around and see how many things around you start with the sound 'h' – hot, house, helmet, horse, heater, head, hair, hands, helicopter.

Day 3

Let/s practice how to write the sound 'h'. Pretend a 'h' is a horse.



Start at the head, go down the horse, up and over his

back.

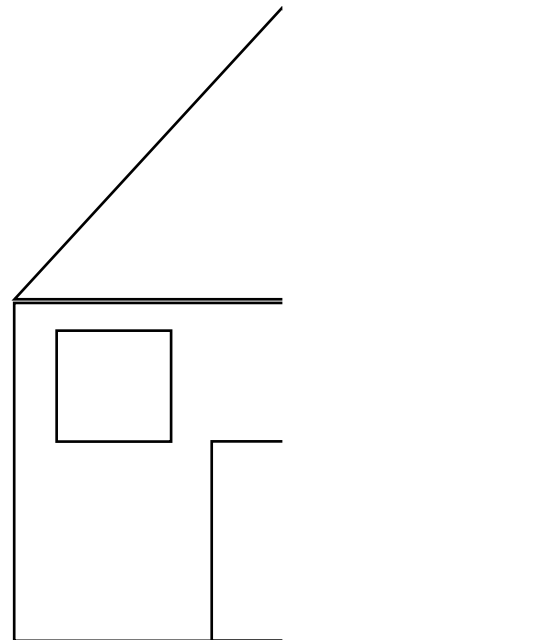
Practise this on paper, in sand, in some flour or even on a steamed mirror in the bathroom. Some 'invisible magic ink' in the air is also great practice.

Day 4

Look through some magazines/ newspapers/ colouring books/ on the internet. Find things that start with the sound 'h'. Cut them out and glue them on a piece of paper if you can. You can even try drawing pictures.

Day 5

Here is a picture of half a house. Print this out or ask mommy/ daddy to draw it for you on a piece of paper. Complete the other half of the house by yourself. Colour the house in, add what you have enjoyed doing at home during this time.



Grade R – Mathematics

Week 1: My Home

Hello Grade R's here we are going to learn about the number 2, look for things that are the same and different and do sums up to 10 with counters.

Day 1


Practise writing the number 2. Ask mommy/daddy to write the number 2 with the word two. Use your finger and trace over the symbol and word. Now, using colours trace over another 3 times. Add the correct number of dots and draw the correct number of objects to match the number 2.

Day 2

Find things that are 2 e.g. 2 eyes/ 2 ears/ 2 shoes, etc. See how many you can find around the house.


Day 3

Look at the following 4 patterns. Find the one in each pattern that is different.



Day 4

Look at the following patterns. Find the 2 in each row that are the same.



Day 5

See if you can work out the following sums using counters. Find 10 objects around the house, bottle lids/ Lego pieces/ pegs, etc.

1. Daddy has 3 ice – screams, mommy has 2. How many ice – creams all together?
2. My brother has 6 cookies, he eats 3. How many are left?
3. Sarah has 5 dolls. Lesedi has 3. Who has more?
4. The man buys 4 hamburgers, his son buys 2 more. How many hamburgers are there?
5. Gerry has 6 cars. Thato has 2 less. How many cars does Thato have?

