

Mathematics memos for week 1 Lesson 3:

Put the numbers in order from smallest to biggest

1 3 6 7

10 12 17 18

Put the numbers in order from biggest to smallest

20 15 11 3

14 9 8 2

What is 1 more than

7 8

9 10

10 11

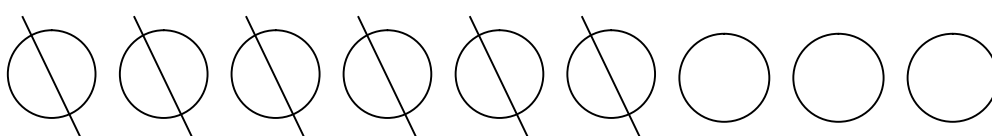
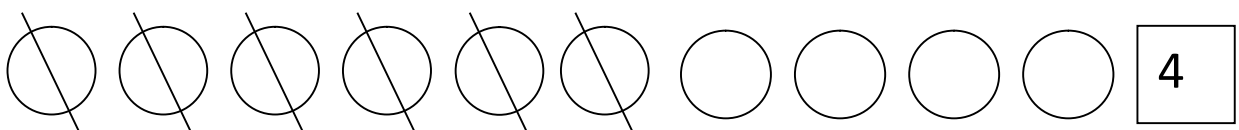
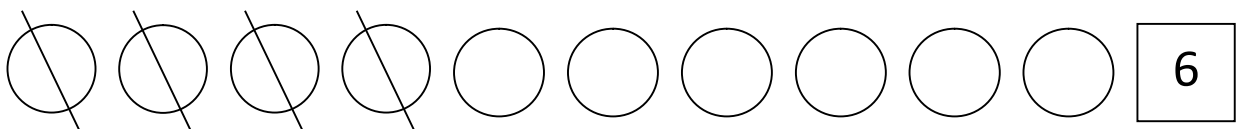
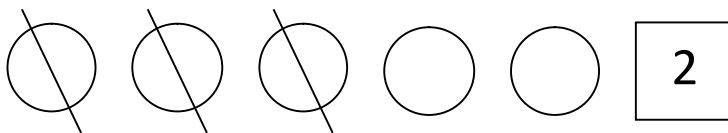
What is 1 less than

4 5


5 6

12 13

Story sums:



or



3