

Mathematics Memos week 1

Lesson 4

Which is bigger?

6 or 12

11 or 15

13 or 25

Which is smaller?

7 or 2

14 or 16

21 or 23

Lesson 5

Which number comes before

4 5

14 15

20 21

Which number comes after

8 9

15 16

26 27

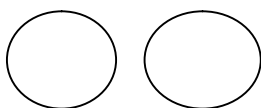
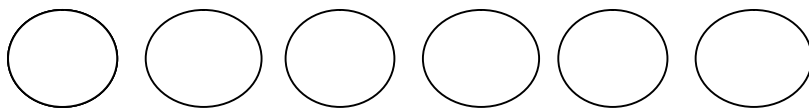
Which number comes between

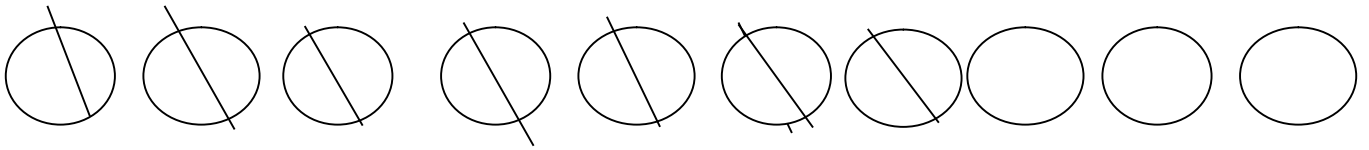
6 7 8

22 23 24

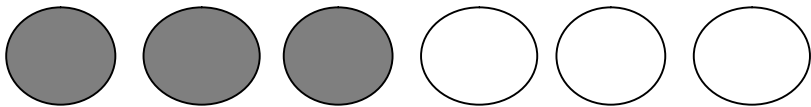
35 36 37

Story sums:





3



3

You could also have crossed out 3 for the last one.