

Online Mathematics Memos

Week 2 Lesson 1

Number Fun worksheet: You should have found 7 sevens. You should have found 6 threes.

Put the numbers in order from smallest to biggest:


5 12 19 20

2 7 8 19

10 11 14 16

Minus sums (cross out) done on the worksheet.

CROSS OUT




how many?

4

cross out 2.

$$4 - 2 =$$

2




how many?

6

cross out 1.

$$6 - 1 =$$

5



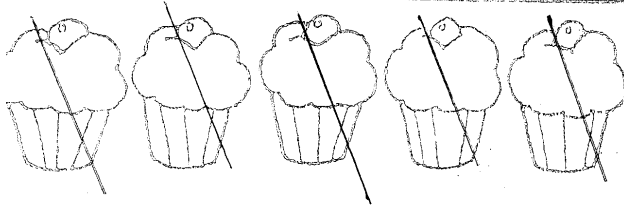
how many?

5

cross out 3.

$$5 - 3 =$$

2




how many?

5

cross out 5.

$$5 - 5 =$$

0



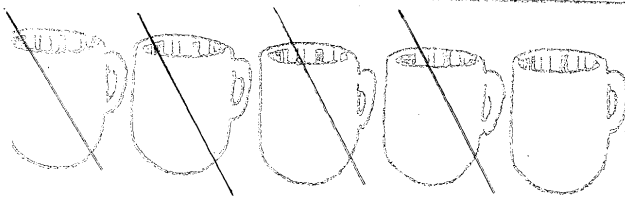
how many?

8

cross out 1.

$$8 - 1 =$$

7



how many?

5

cross out 4.

$$5 - 4 =$$

1

Week 2 Lesson 2


What is 2 more than:

6 8

8 10

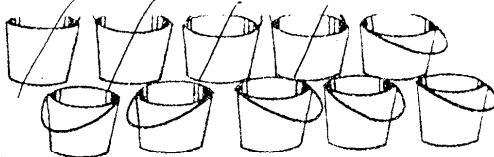

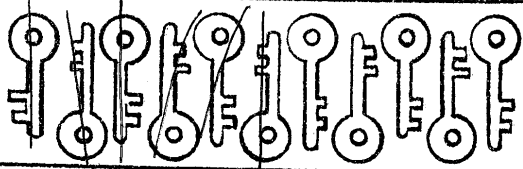




4 6

Complete the shapes pattern:



Subtraction answers are on the worksheet.

Subtraction: Complete the minus worksheet

	How many buckets? Chris took 4.	<input type="text" value="10"/>
	How many left?	<input type="text" value="6"/>
	<input type="text" value="10"/> - 4 =	<input type="text" value="6"/>
	How many bows? 7 fall off.	<input type="text" value="12"/>
	How many left?	<input type="text" value="5"/>
	<input type="text" value="12"/> - <input type="text" value="7"/> =	<input type="text" value="5"/>
	How many keys? Allen loses 6 keys.	<input type="text" value="11"/>
	How many left?	<input type="text" value="5"/>
	<input type="text" value="11"/> - <input type="text" value="6"/> =	<input type="text" value="5"/>
	How many dogs? 5 run away.	<input type="text" value="12"/>
	How many left?	<input type="text" value="7"/>
	<input type="text" value="12"/> - <input type="text" value="5"/> =	<input type="text" value="7"/>
	How many snails? 5 slide away.	<input type="text" value="12"/>
	How many left?	<input type="text" value="7"/>
	<input type="text" value="12"/> - <input type="text" value="5"/> =	<input type="text" value="7"/>
	How many fish? 2 swim away.	<input type="text" value="11"/>
	How many left?	<input type="text" value="9"/>
	<input type="text" value="11"/> - <input type="text" value="2"/> =	<input type="text" value="9"/>
	How many sweets? Jeff eats 8.	<input type="text" value="12"/>
	How many left?	<input type="text" value="4"/>
	<input type="text" value="12"/> - <input type="text" value="8"/> =	<input type="text" value="4"/>